

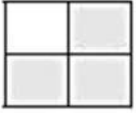
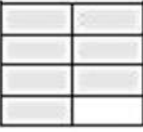
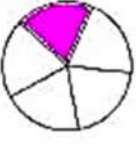


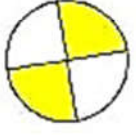
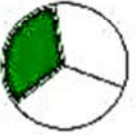




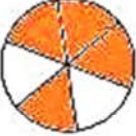
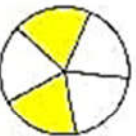







1.- Forma una cadena con estas 21 fichas de dominós, conectando la fracción con una representación geométrica equivalente. Empieza por la ficha que quieras.

$\frac{1}{3}$   ●   	$\frac{3}{4}$   ●   	$\frac{1}{4}$   ●   
   ●   $\frac{1}{4}$	   ●   $\frac{3}{8}$	   ●   $\frac{1}{5}$
$\frac{7}{8}$   ●   	$\frac{1}{3}$   ●   	$\frac{1}{6}$   ●   
$\frac{1}{3}$   ●   	   ●   $\frac{1}{2}$	   ●   $\frac{2}{3}$
   ●   $\frac{1}{2}$	$\frac{2}{5}$   ●   	$\frac{1}{2}$   ●   
$\frac{3}{5}$   ●   	   ●   $\frac{2}{3}$	   ●   $\frac{1}{2}$
   ●   $\frac{3}{4}$	$\frac{1}{4}$   ●   	$\frac{1}{3}$   ●   